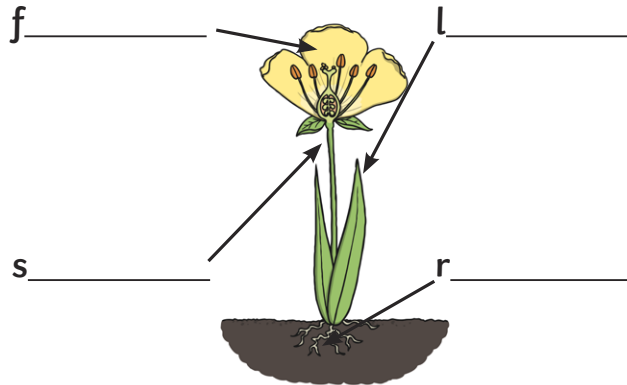


Year 1 Plants

Label the parts of a plant.



Draw a line from the part of the plant to the job it does.

leaf

Carries water to different parts of the plant and holds the plant upright.

root

Collects sunlight.

stem

Keeps the plant in the ground and gets water from the soil.

Choose a word from the box to fill in the gaps in the sentences.

evergreens

deciduous

autumn

Some trees lose their leaves in the _____. These trees are called _____.

Some trees keep their leaves all year. They are called _____.

Match the picture of a plant with its name.



rose



ivy

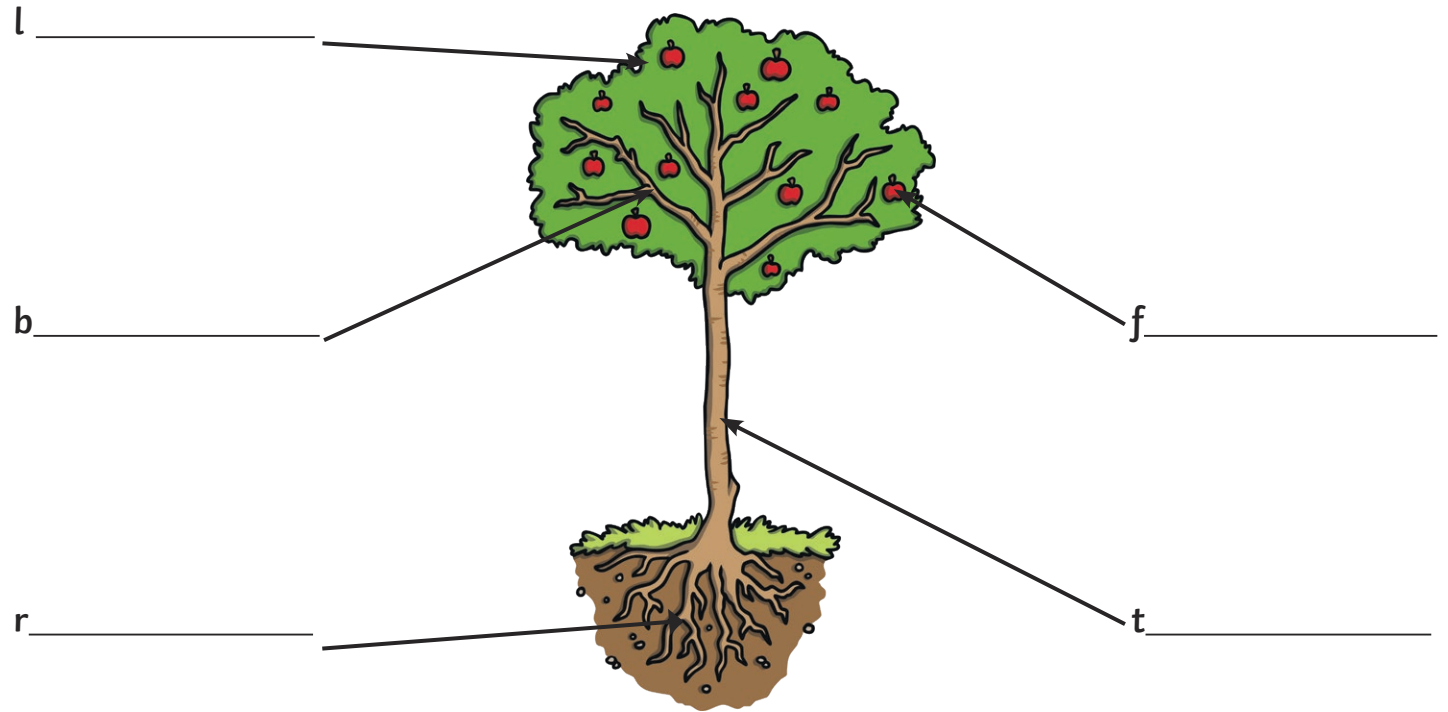


buttercup



sunflower

Label the parts of a tree.



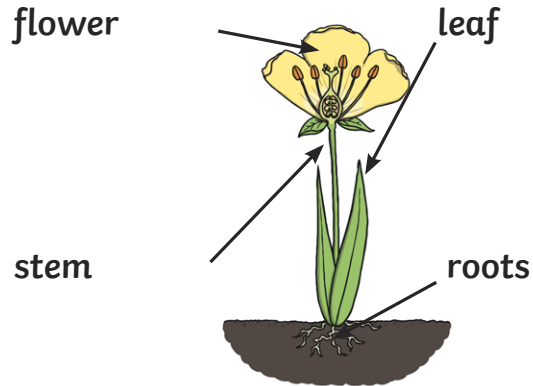
Which part of a plant are bees attracted to?

Circle the things that a plant needs to grow well.

sunlight	electricity	biscuits	warmth
fruit juice	food	water	wifi

Year 1 Plants Answers

Label the parts of a plant.



Draw a line from the part of the plant to the job it does.

leaf	Carries water to different parts of the plant and holds the plant upright.
root	Collects sunlight.
stem	Keeps the plant in the ground and gets water from the soil.

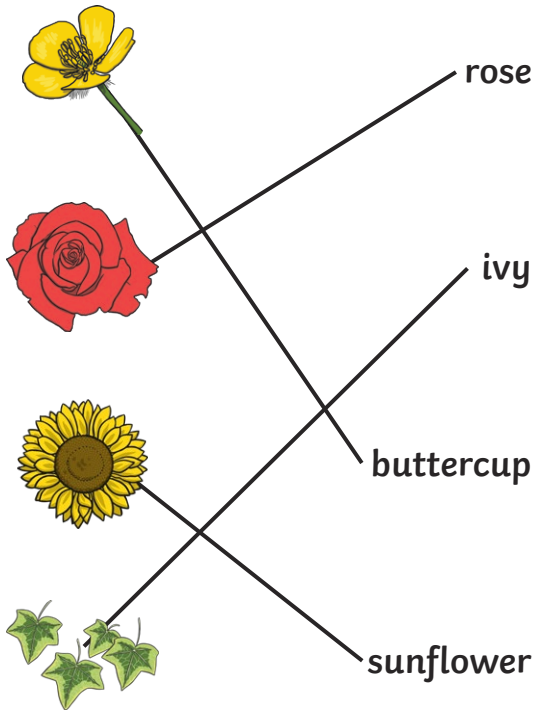
Choose a word from the box to fill in the gaps in the sentences.

evergreens	deciduous	autumn
------------	-----------	--------

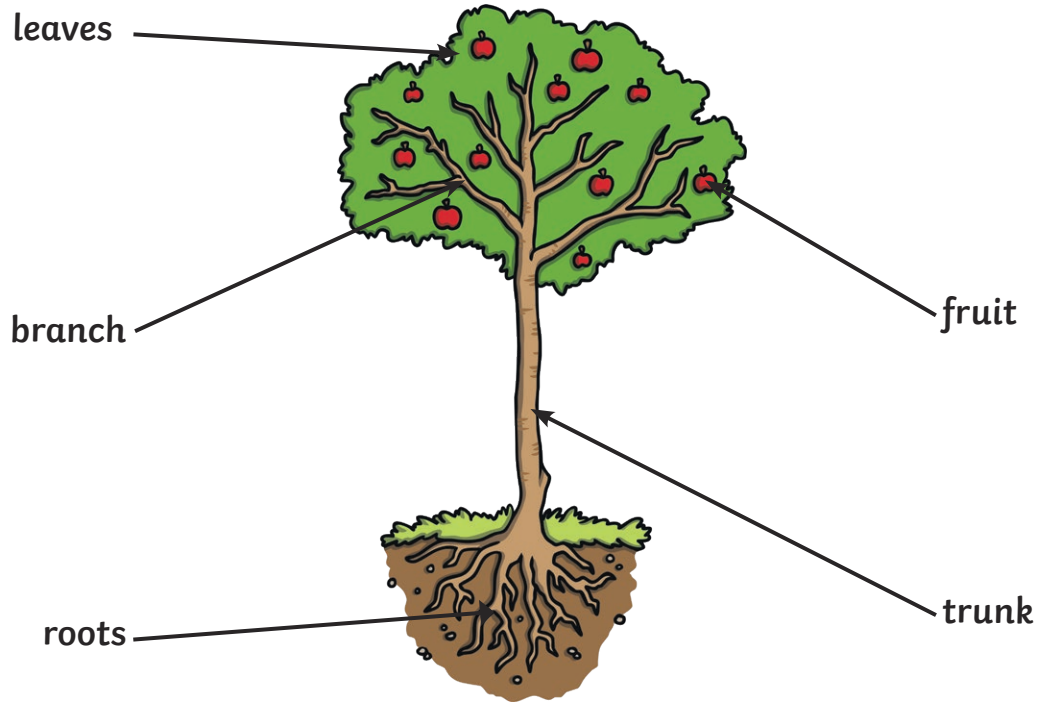
Some trees lose their leaves in the **autumn**. These trees are called **deciduous**.

Some trees keep their leaves all year. They are called **evergreens**.

Match the picture of a plant with its name.



Label the parts of a tree.



Which part of a plant are bees attracted to?

flowers

Circle the things that a plant needs to grow well.

sunlight	electricity	biscuits	warmth
fruit juice	food	water	wifi